

Answer Booklet

Year 2 Maths:

Workbook Pack

Year 2 Programme of Study: Multiplication and Division

Statutory Requirements	Worksheet	Page Number	Notes
Recall and use multiplication and division facts for the 2, 5 and 10 multiplication tables, including recognising odd and even numbers.	2 Times Table	2	
	5 Times Table	3	
	10 Times Table	4	
	Dividing by 2 Race	5	
	Dividing by 5 Race	6	
	Dividing by 10 Race	7	
	Recognising Odd and Even Numbers	8	
Calculate mathematical statements for multiplication and division within the multiplication tables and write them using the multiplication (\times), division (\div) and equals ($=$) signs.	Writing Multiplication and Division Statements	9	
Show that multiplication of two numbers can be done in any order (commutative) and division of one number by another cannot.	Triangle Statements	10	
	Match the Multiplication	11	
	Multiplication Triangles	12	
Solve problems involving multiplication and division, using materials, arrays, repeated addition, mental methods, and multiplication and division facts, including problems in contexts.	Multiplication 2, 5, 10 Times Table	13 - 15	
	Year 2 Multiplication and Division Word Problems $\times 2$, $\times 5$, $\times 10$	16	
	Multiplication on a Number Line $\times 2$	17 - 18	
	Multiplication on a Number Line $\times 5$	19 - 20	
	Multiplication Building Blocks	21	

2 Times Table: Answers

Questions:																										
a	2																									
b	4																									
c	6																									
d	8																									
e	10																									
f	12																									
g	14																									
h	16																									
i	18																									
j	20																									
k	22																									
l	24																									
Count in 2s and colour in the grid:																										
	<table><tr><td>1</td><td>2</td><td>3</td><td>4</td><td>5</td></tr><tr><td>6</td><td>7</td><td>8</td><td>9</td><td>10</td></tr><tr><td>11</td><td>12</td><td>13</td><td>14</td><td>15</td></tr><tr><td>16</td><td>17</td><td>18</td><td>19</td><td>20</td></tr><tr><td>21</td><td>22</td><td>23</td><td>24</td><td>25</td></tr></table>	1	2	3	4	5	6	7	8	9	10	11	12	13	14	15	16	17	18	19	20	21	22	23	24	25
1	2	3	4	5																						
6	7	8	9	10																						
11	12	13	14	15																						
16	17	18	19	20																						
21	22	23	24	25																						
How many ears are there?																										
	2 x 2 = 4																									
	3 x 2 = 6																									
	7 x 2 = 14																									
	5 x 2 = 10																									

5 Times Table: Answers

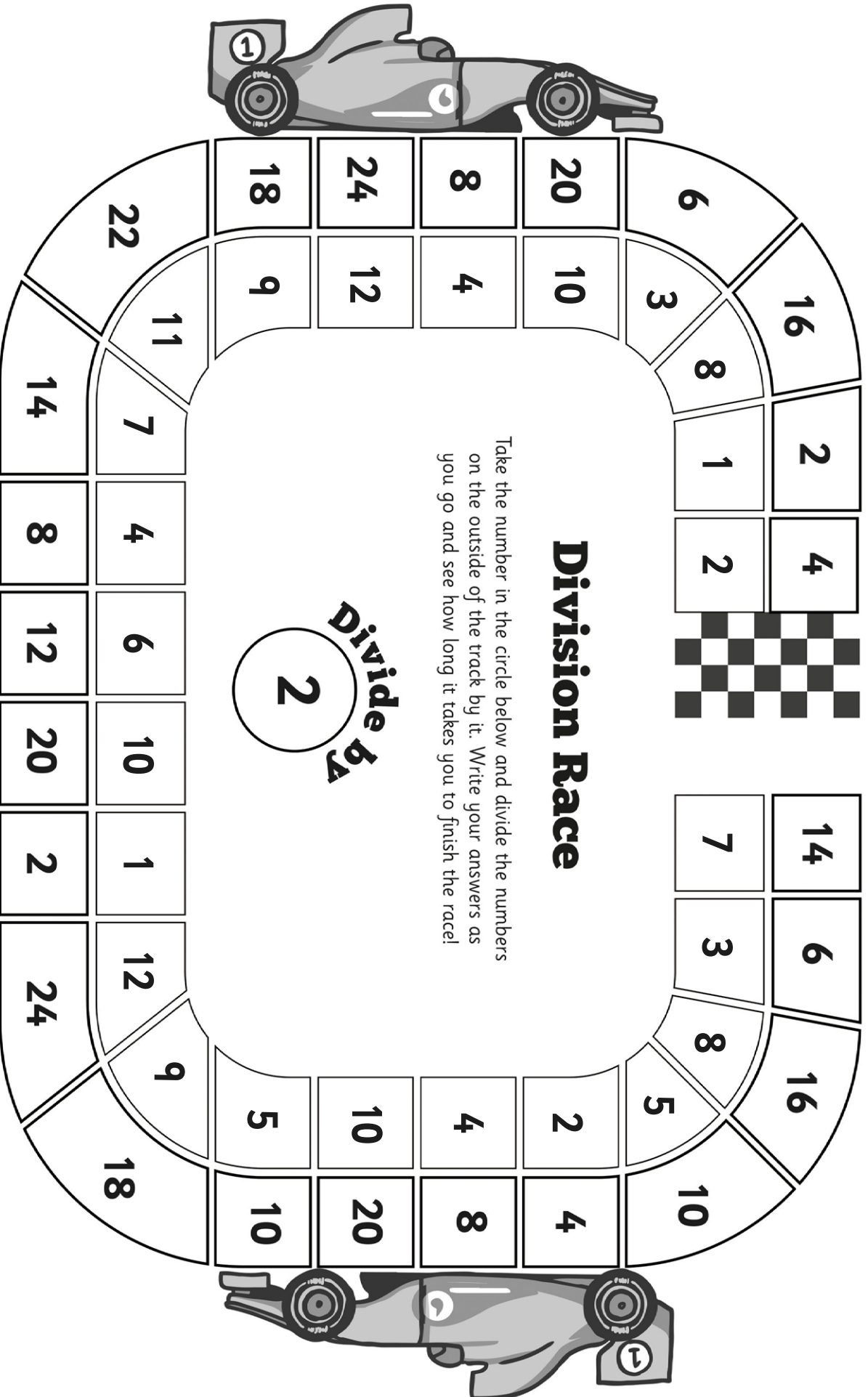
Questions:																																																																																																					
a	10																																																																																																				
b	15																																																																																																				
c	20																																																																																																				
d	25																																																																																																				
e	30																																																																																																				
f	35																																																																																																				
Count in 2s and colour in the grid:																																																																																																					
	<table border="1"> <tr><td>1</td><td>2</td><td>3</td><td>4</td><td>5</td><td>6</td><td>7</td><td>8</td><td>9</td><td>10</td></tr> <tr><td>11</td><td>12</td><td>13</td><td>14</td><td>15</td><td>16</td><td>17</td><td>18</td><td>19</td><td>20</td></tr> <tr><td>21</td><td>22</td><td>23</td><td>24</td><td>25</td><td>26</td><td>27</td><td>28</td><td>29</td><td>30</td></tr> <tr><td>31</td><td>32</td><td>33</td><td>34</td><td>35</td><td>36</td><td>37</td><td>38</td><td>39</td><td>40</td></tr> <tr><td>41</td><td>42</td><td>43</td><td>44</td><td>45</td><td>46</td><td>47</td><td>48</td><td>49</td><td>50</td></tr> <tr><td>51</td><td>52</td><td>53</td><td>54</td><td>55</td><td>56</td><td>57</td><td>58</td><td>59</td><td>60</td></tr> <tr><td>61</td><td>62</td><td>63</td><td>64</td><td>65</td><td>66</td><td>67</td><td>68</td><td>69</td><td>70</td></tr> <tr><td>71</td><td>72</td><td>73</td><td>74</td><td>75</td><td>76</td><td>77</td><td>78</td><td>79</td><td>80</td></tr> <tr><td>81</td><td>82</td><td>83</td><td>84</td><td>85</td><td>86</td><td>87</td><td>88</td><td>89</td><td>90</td></tr> <tr><td>91</td><td>92</td><td>93</td><td>94</td><td>95</td><td>96</td><td>97</td><td>98</td><td>99</td><td>100</td></tr> </table>	1	2	3	4	5	6	7	8	9	10	11	12	13	14	15	16	17	18	19	20	21	22	23	24	25	26	27	28	29	30	31	32	33	34	35	36	37	38	39	40	41	42	43	44	45	46	47	48	49	50	51	52	53	54	55	56	57	58	59	60	61	62	63	64	65	66	67	68	69	70	71	72	73	74	75	76	77	78	79	80	81	82	83	84	85	86	87	88	89	90	91	92	93	94	95	96	97	98	99	100
1	2	3	4	5	6	7	8	9	10																																																																																												
11	12	13	14	15	16	17	18	19	20																																																																																												
21	22	23	24	25	26	27	28	29	30																																																																																												
31	32	33	34	35	36	37	38	39	40																																																																																												
41	42	43	44	45	46	47	48	49	50																																																																																												
51	52	53	54	55	56	57	58	59	60																																																																																												
61	62	63	64	65	66	67	68	69	70																																																																																												
71	72	73	74	75	76	77	78	79	80																																																																																												
81	82	83	84	85	86	87	88	89	90																																																																																												
91	92	93	94	95	96	97	98	99	100																																																																																												
How many of each?																																																																																																					
	$3 \times 5 = 15$																																																																																																				
	$5 \times 5 = 25$																																																																																																				
	$4 \times 5 = 20$																																																																																																				

10 Times Table: Answers

Questions:																																																																																																					
a	20																																																																																																				
b	30																																																																																																				
c	40																																																																																																				
d	50																																																																																																				
e	60																																																																																																				
f	70																																																																																																				
Count in 2s and colour in the grid:																																																																																																					
	<table border="1"> <tr><td>1</td><td>2</td><td>3</td><td>4</td><td>5</td><td>6</td><td>7</td><td>8</td><td>9</td><td>10</td></tr> <tr><td>11</td><td>12</td><td>13</td><td>14</td><td>15</td><td>16</td><td>17</td><td>18</td><td>19</td><td>20</td></tr> <tr><td>21</td><td>22</td><td>23</td><td>24</td><td>25</td><td>26</td><td>27</td><td>28</td><td>29</td><td>30</td></tr> <tr><td>31</td><td>32</td><td>33</td><td>34</td><td>35</td><td>36</td><td>37</td><td>38</td><td>39</td><td>40</td></tr> <tr><td>41</td><td>42</td><td>43</td><td>44</td><td>45</td><td>46</td><td>47</td><td>48</td><td>49</td><td>50</td></tr> <tr><td>51</td><td>52</td><td>53</td><td>54</td><td>55</td><td>56</td><td>57</td><td>58</td><td>59</td><td>60</td></tr> <tr><td>61</td><td>62</td><td>63</td><td>64</td><td>65</td><td>66</td><td>67</td><td>68</td><td>69</td><td>70</td></tr> <tr><td>71</td><td>72</td><td>73</td><td>74</td><td>75</td><td>76</td><td>77</td><td>78</td><td>79</td><td>80</td></tr> <tr><td>81</td><td>82</td><td>83</td><td>84</td><td>85</td><td>86</td><td>87</td><td>88</td><td>89</td><td>90</td></tr> <tr><td>91</td><td>92</td><td>93</td><td>94</td><td>95</td><td>96</td><td>97</td><td>98</td><td>99</td><td>100</td></tr> </table>	1	2	3	4	5	6	7	8	9	10	11	12	13	14	15	16	17	18	19	20	21	22	23	24	25	26	27	28	29	30	31	32	33	34	35	36	37	38	39	40	41	42	43	44	45	46	47	48	49	50	51	52	53	54	55	56	57	58	59	60	61	62	63	64	65	66	67	68	69	70	71	72	73	74	75	76	77	78	79	80	81	82	83	84	85	86	87	88	89	90	91	92	93	94	95	96	97	98	99	100
1	2	3	4	5	6	7	8	9	10																																																																																												
11	12	13	14	15	16	17	18	19	20																																																																																												
21	22	23	24	25	26	27	28	29	30																																																																																												
31	32	33	34	35	36	37	38	39	40																																																																																												
41	42	43	44	45	46	47	48	49	50																																																																																												
51	52	53	54	55	56	57	58	59	60																																																																																												
61	62	63	64	65	66	67	68	69	70																																																																																												
71	72	73	74	75	76	77	78	79	80																																																																																												
81	82	83	84	85	86	87	88	89	90																																																																																												
91	92	93	94	95	96	97	98	99	100																																																																																												
How many of each?																																																																																																					
	$4 \times 10 = 40$																																																																																																				
	$6 \times 10 = 60$																																																																																																				
	$10 \times 10 = 100$																																																																																																				


Division by 2 Race

Start 



Division by 5 Race

Start

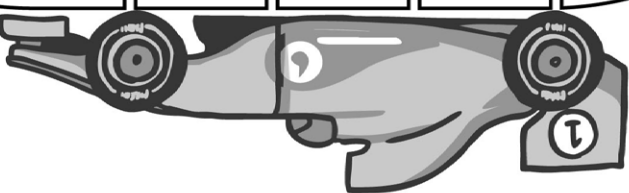



Division Race

Take the number in the circle below and divide the numbers on the outside of the track by it. Write your answers as you go and see how long it takes you to finish the race!

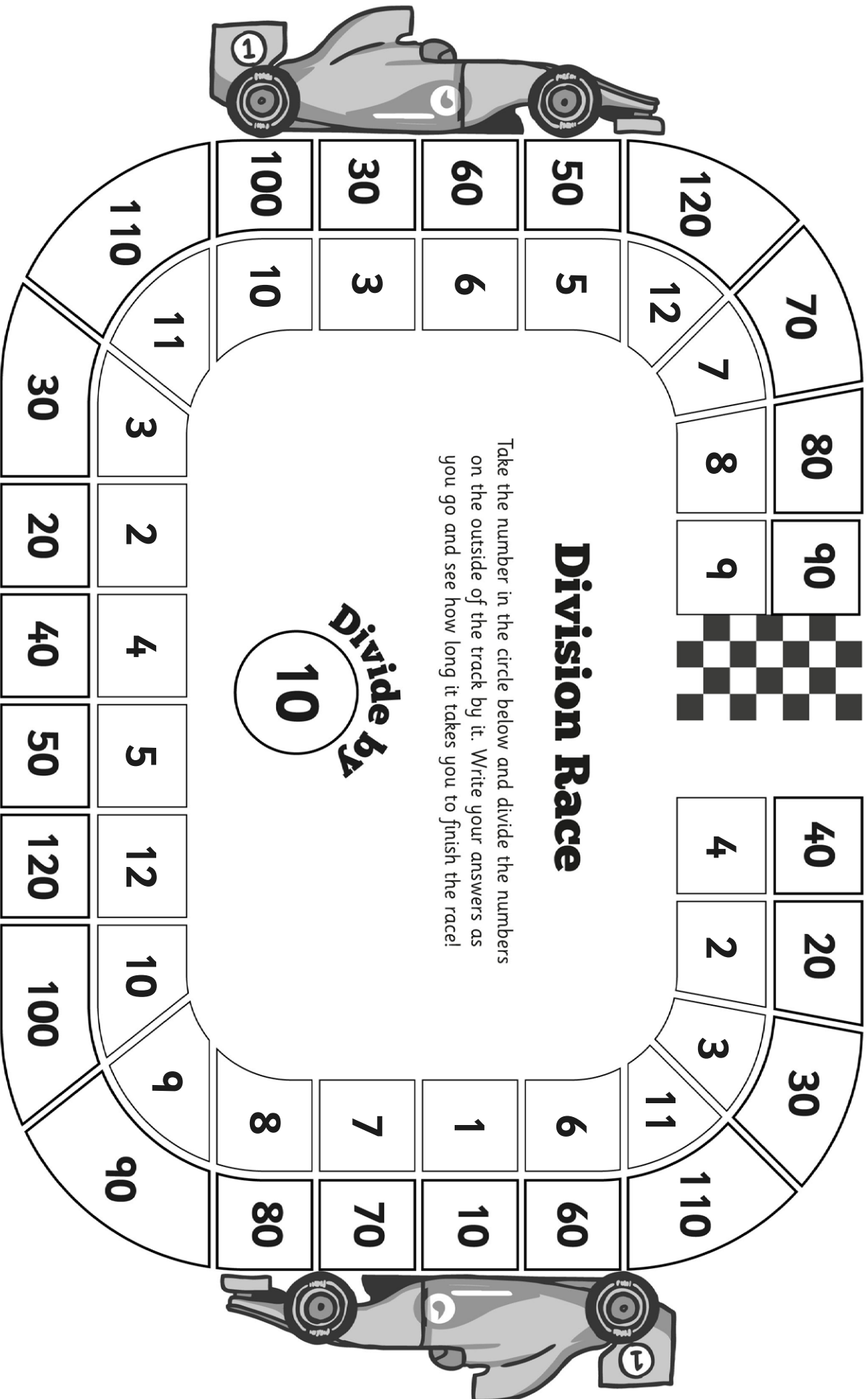
Divide by

১৮



Division by 10 Race

Start 



Multiplication Building Blocks: Answers

question	answer
	3 = odd
	6 = even
	15 = odd
	12 = even
	1 = odd
	10 = even
	18 = even
	27 = odd
	40 = even
	32 = even
	53 = odd
	31 = odd
	58 = even
	22 = even
	83 = odd
	38 = even
	101 = odd
	138 = even
	199 = odd

Writing Multiplication and Division Statements: Answers

question	answer		
1	x	$3 \times 7 = 21$	$7 \times 3 = 21$
	÷	$21 \div 7 = 3$	$21 \div 3 = 7$
2	x	$4 \times 6 = 24$	$6 \times 4 = 24$
	÷	$24 \div 6 = 4$	$24 \div 4 = 6$
3	x	$2 \times 9 = 18$	$9 \times 2 = 18$
	÷	$18 \div 2 = 9$	$18 \div 9 = 2$
4	x	$3 \times 9 = 27$	$9 \times 3 = 27$
	÷	$27 \div 3 = 9$	$27 \div 9 = 3$
5	x	$5 \times 6 = 30$	$6 \times 5 = 30$
	÷	$30 \div 5 = 6$	$30 \div 6 = 5$

Triangle Statements: Answers

question	answer		question	answer	
1	Multiplication ✓	$2 \times 7 = 14$ $7 \times 2 = 14$	5	Multiplication ✓	$11 \times 5 = 55$ $5 \times 11 = 55$
	Division ✓	$14 \div 7 = 2$ $14 \div 2 = 7$		Division ✓	$55 \div 5 = 11$ $55 \div 11 = 5$
	Division ✗	$2 \div 14 = 7$ $2 \div 7 = 14$ $7 \div 2 = 14$ $7 \div 14 = 2$		Division ✗	$5 \div 55 = 11$ $11 \div 55 = 5$ $11 \div 5 = 55$ $5 \div 11 = 55$
2	Multiplication ✓	$5 \times 6 = 30$ $6 \times 5 = 30$	6	Multiplication ✓	$10 \times 9 = 90$ $9 \times 10 = 90$
	Division ✓	$30 \div 6 = 5$ $30 \div 5 = 6$		Division ✓	$90 \div 10 = 9$ $90 \div 9 = 10$
	Division ✗	$6 \div 30 = 5$ $6 \div 5 = 30$ $5 \div 30 = 6$ $5 \div 6 = 30$		Division ✗	$10 \div 90 = 9$ $9 \div 90 = 10$ $9 \div 10 = 90$ $10 \div 9 = 90$
3	Multiplication ✓	$10 \times 2 = 20$ $2 \times 10 = 20$	7	Multiplication ✓	$12 \times 2 = 24$ $2 \times 12 = 24$
	Division ✓	$20 \div 10 = 2$ $20 \div 2 = 10$		Division ✓	$24 \div 2 = 12$ $24 \div 12 = 2$
	Division ✗	$10 \div 20 = 2$ $2 \div 20 = 10$ $2 \div 10 = 20$ $10 \div 2 = 20$		Division ✗	$2 \div 24 = 12$ $12 \div 24 = 2$ $12 \div 2 = 24$ $2 \div 12 = 24$
4	Multiplication ✓	$9 \times 2 = 18$ $2 \times 9 = 18$	8	Multiplication ✓	$12 \times 10 = 120$ $10 \times 12 = 120$
	Division ✓	$18 \div 2 = 9$ $18 \div 9 = 2$		Division ✓	$120 \div 10 = 12$ $120 \div 12 = 10$
	Division ✗	$2 \div 18 = 9$ $9 \div 18 = 2$ $9 \div 2 = 18$ $2 \div 9 = 18$		Division ✗	$10 \div 120 = 12$ $12 \div 120 = 10$ $12 \div 10 = 120$ $10 \div 12 = 120$

Match the Multiplication: Answers





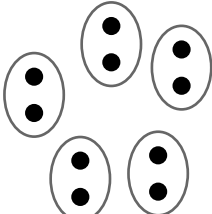



question	answer
	$5 \times 3 = 15$
	$2 \times 10 = 20$
	$10 \times 9 = 90$
	$5 \times 7 = 35$
	$2 \times 6 = 12$
	$8 \times 2 = 16$
	$5 \times 10 = 50$
	$5 \times 5 = 25$

Multiplication Triangles: Answers

question	answer	question	answer
Sheet 1.		Sheet 2.	
1	4	13	5
2	40	14	100
3	10	15	5
4	11	16	6
5	24	17	40
6	5	18	2
7	8	19	6
8	12	20	8
9	5	21	2
10	2	22	2
11	16	23	50
12	5	24	5









Multiplication 2 Times Table

Complete the table below.

Factors	2×5	2×7	2×9	2×10
Product	10	14	18	20
Repeated Addition	$2 + 2 + 2 + 2 + 2$	$2 + 2 + 2 + 2 + 2 + 2 + 2$	$2 + 2 + 2 + 2 + 2 + 2 + 2 + 2 + 2$	$2 + 2 + 2 + 2 + 2 + 2 + 2 + 2 + 2 + 2$
Commutative Property	2×5 5×2	2×7 7×2	2×9 9×2	2×10 10×2
Array				
Groups				









Multiplication 5 Times Table

Complete the table below.

Factors	5×7	5×5	5×11	5×2
Product	35	25	55	10
Repeated Addition	$5 + 5 + 5 + 5 + 5 + 5 + 5$	$5 + 5 + 5 + 5 + 5$	$5 + 5 + 5 + 5 + 5 + 5 + 5 + 5 + 5 + 5 + 5$	$5 + 5$
Commutative Property	5×7 7×5	5×5	5×11 11×5	5×2 2×5
Array				
Groups				

Multiplication 10 Times Table

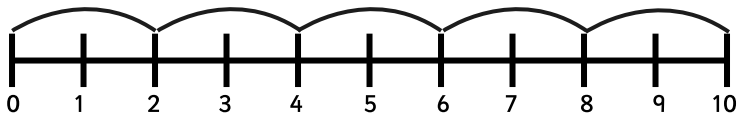
Complete the table below.

Factors	10×3	10×7	10×10	10×11
Product	30	70	100	110
Repeated Addition	$10 + 10 + 10$	$10 + 10 + 10 + 10 + 10 + 10 + 10$	$10 + 10 + 10 + 10 + 10 + 10 + 10 + 10 + 10 + 10$	$10 + 10 + 10 + 10 + 10 + 10 + 10 + 10 + 10 + 10 + 10$
Commutative Property	10×3 3×10	10×7 7×10	10×10	10×11 11×10
Array				
Groups				

Multiplication and Division Word Problems: Answers

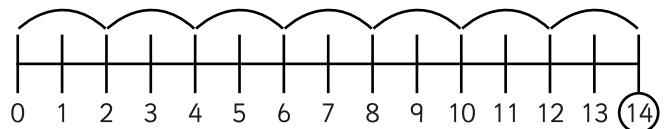
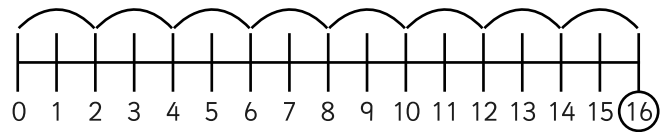
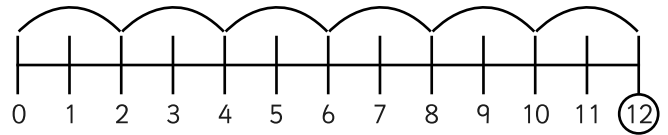
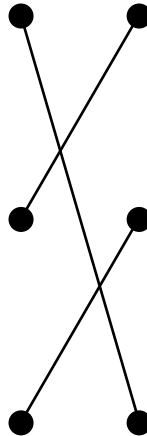

question	answer
1	22 wheels
2	35 guests
3	45
4	40 points
5	£60
6	16 children
7	5 biscuits
8	7 packets
9	70 owls

Multiplication on a Number Line x2: Answers

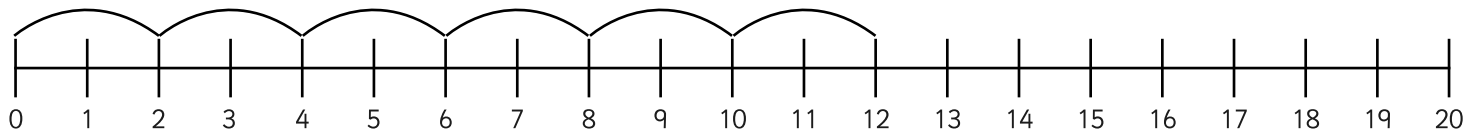
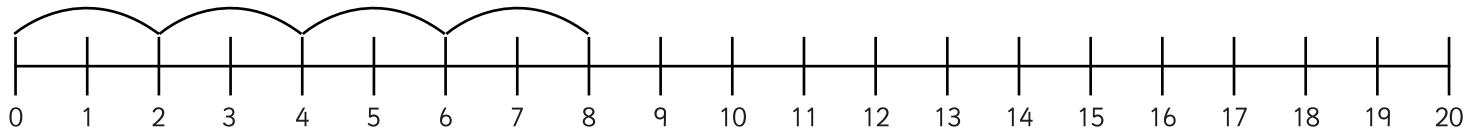


5×2 means do 5 jumps of 2 = 10

1. Can you match the picture to the number line with the matching jumps?

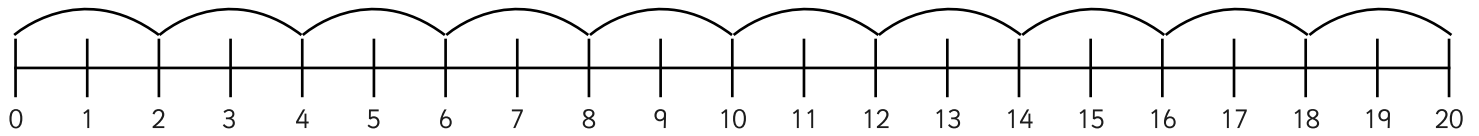


2. Can you draw jumps of 2 on the number line for the following pictures?



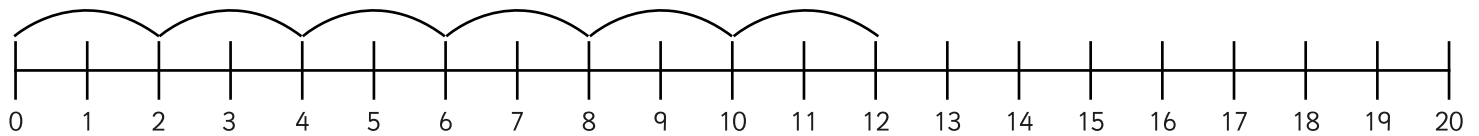
3. How many 2s are in 20? Can you draw the jumps?

10



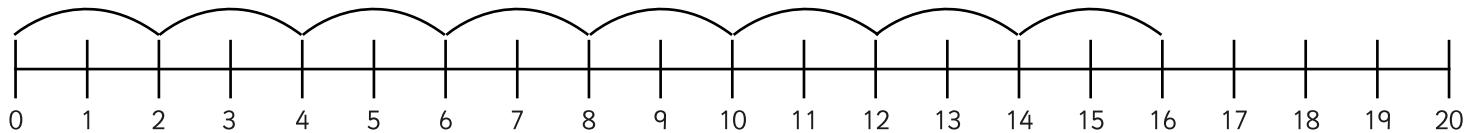
4. What are 6 lots of 2? Can you draw the jumps?

12

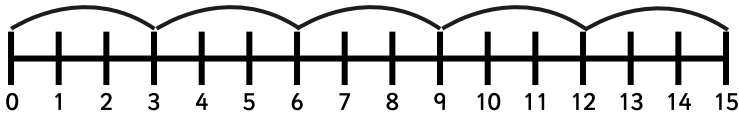


5. I can see 8 pairs of shoes. How many shoes can I see altogether?

16

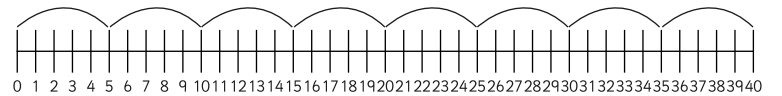
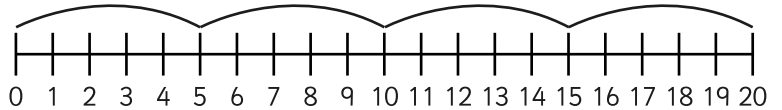
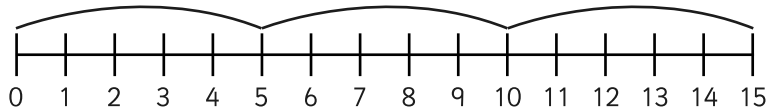
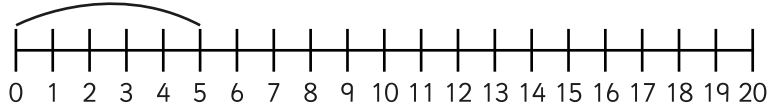
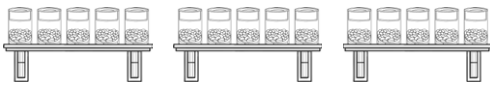




Multiplication on a Number Line x 5

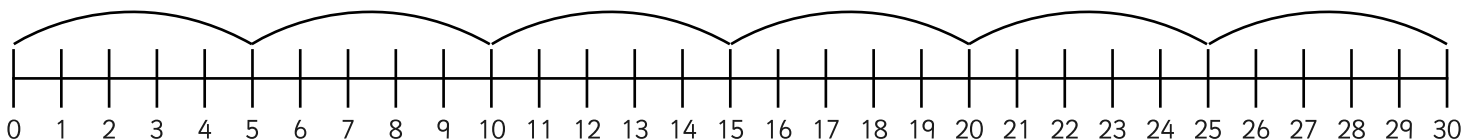
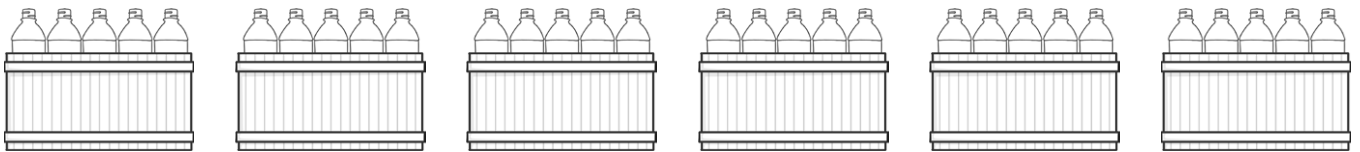
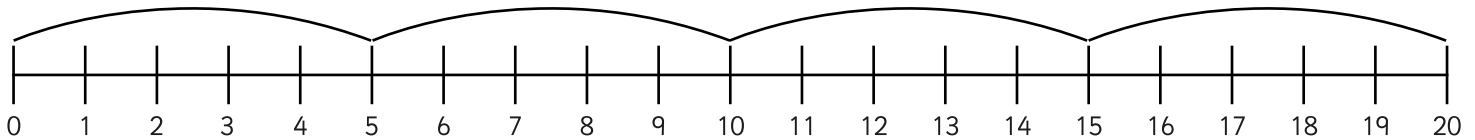


3×5 means do 3 jumps of 5 = 15

1. Join the dots to match the pictures to the number lines.

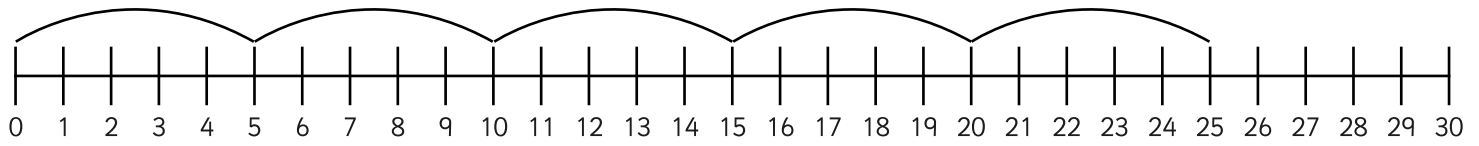


2. Can you draw jumps of 5 on the number line for the following pictures?



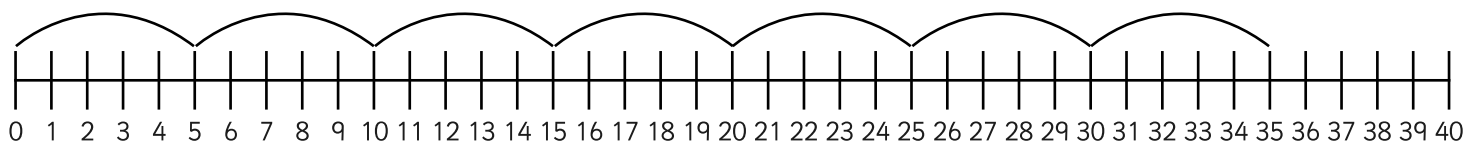
3. How many 5s are in 25? Can you draw the jumps?

5



4. What are 7 lots of 5? Can you draw the jumps?

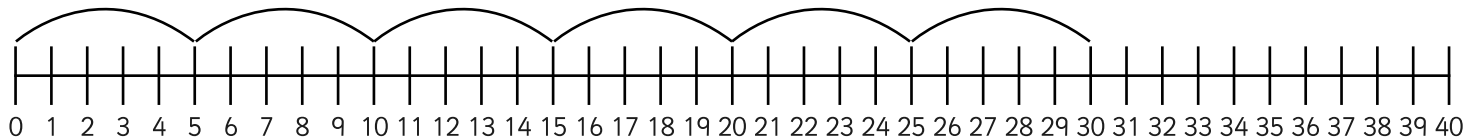
35



5. I have 6 bags of sweets. There are 5 sweets in each bag. How many sweets do I have altogether?



30



Multiplication Building Blocks: Answers

question	answer
1	30
2	45
3	95
4	38
5	90
6	180
7	59
8	66